



حاضر

غائب

رقم الورقة

رقم المغلف

سُلْطَنَةُ عُومَانِ
وَزَارَةُ التَّرْبِيَةِ وَالتَّحْلِيلِ

امتحان شهادة دبلوم التعليم العام للمدارس الخاصة (ثنائية اللغة)

للعام الدراسي ١٤٣٣/١٤٣٤ هـ - ٢٠١٢ / ٢٠١٣ م

الدور الثاني - الفصل الدراسي الأول

• زمن الإجابة: ثلاث ساعات.

• الإجابة في الورقة نفسها.

• تنبيه: الرياضيات.

• الأسئلة في (١٥) صفحة.

تعليمات وضوابط التقدم للامتحان:

- الحضور إلى اللجنة قبل عشر دقائق من بدء الامتحان لأهمية.
 - إبراز البطاقة الشخصية لمراقب اللجنة.
 - يمنع كتابة رقم الجلوس أو الاسم أو أي بيانات أخرى تدل على شخصية الممتحن في دفتر الامتحان، وإلا ألغى امتحانه.
 - يحظر على الممتحنين أن يصطحبوا معهم بمركز الامتحان كتباً دراسية أو كراسات أو مذكرات أو هواتف محمولة أو أجهزة النداء الآلي أو أي شيء له علاقة بالامتحان كما لا يجوز إدخال آلات حادة أو أسلحة من أي نوع كانت أو حقائب يدوية أو آلات حاسبة ذات صفة تخزينية.
 - يجب أن يتقيد المتقدمون بالزي الرسمي (الدشداشة البيضاء والمصر أو الكمة للطلاب والدارسين والزي المدرسي للطالبات واللباس العماني للدارسات) ويمنع النقاب داخل المركز ولجان الامتحان.
 - لا يسمح للمتقدم المتأخر عن موعد بداية الامتحان بالدخول إلا إذا كان التأخير بعذر قاهر يقبله رئيس المركز وفي حدود عشر دقائق فقط.
- يتم الالتزام بالإجراءات الواردة في دليل الطالب لأداء امتحان شهادة دبلوم التعليم العام.
- يقوم المتقدم بالإجابة عن أسئلة الامتحان المقالية بقلم الحبر (الأزرق أو الأسود).
- يقوم المتقدم بالإجابة عن أسئلة الاختيار من متعدد بتظليل الشكل () وفق النموذج الآتي:
- س - عاصمة سلطنة عمان هي:
- القاهرة الدوحة
- مسقط أبوظبي
- ملاحظة: يتم تظليل الشكل () باستخدام القلم الرصاص وعند الخطأ، امسح بعناية لإجراء التغيير.
- صحيح غير صحيح
-

Question One

(28 marks)

There are 14 multiple-choice items worth two marks each.
Shade the best correct answer for each of the following items.

1. $\lim_{h \rightarrow 0} \frac{f(7) - f(7 + h)}{2h} =$

$-\frac{1}{2}f'(7)$

$\frac{1}{2}f'(7)$

$f'(7)$

$-f'(7)$

2. If $f(x) = ax^2 + 3x$ and $f'(2) = -5$, then the value of a is:

-2

$-\frac{1}{2}$

$\frac{1}{2}$

2

3. If $f(x) = \frac{x^3}{3} + \frac{3x^3}{3} + 9$, then the x -coordinates of the stationary points are:

$0, \frac{9}{2}$

$0, \frac{-9}{2}$

$0, 3$

$0, -3$

4. If $\frac{1}{(x+3)(x+2)} = \frac{A}{x+3} + \frac{B}{x+2}$, then $4A + 6B =$

0

1

2

4

5. Which of trigonometric functions are both have domain $\theta \in R, \theta \neq (2n + 1) 90^\circ$:

$\cot\theta, \sec\theta$

$\sec\theta, \tan\theta$

$\operatorname{cosec}\theta, \tan\theta$

$\cot\theta, \operatorname{cosec}\theta$

6. If $\operatorname{cosec} \theta = \frac{5}{4}$ and θ is obtuse, then $\tan \theta$ equals:

$-\frac{4}{3}$

$-\frac{4}{5}$

$-\frac{3}{4}$

$-\frac{3}{5}$

7. The $\operatorname{cosec} \left(\frac{1}{2} \theta - 5 \right) = \sqrt{2}$, $0^\circ < \theta < 180^\circ$, then $\theta =$

20°

25°

80°

100°

8. If $t = \sin \theta$, then $1 - 2t^2 =$

$\frac{1}{2} \cos \theta$

$\frac{1}{2} \cos 2\theta$

$\cos 2\theta$

$2 \cos \theta$

9. $\int \frac{dt}{\pi^{-5}} =$

$\frac{\pi^6}{6} + c$

$5\pi^4 + c$

$\pi^5 t + c$

$\frac{\pi^6}{6} t + c$

10. $\int \frac{x^2 - 9}{x + 3} dx =$

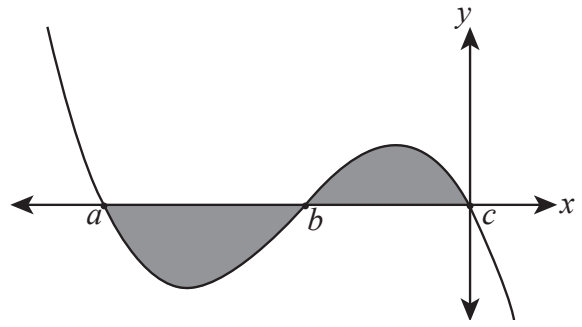
$\frac{x^2}{2} + 3x + c$

$\frac{x^2}{2} - 3x + c$

$x^2 - 3x + c$

$x^2 + 3x + c$

11. Consider the sketch, if $\int_a^b f(x) dx = -4$ and $\int_b^c f(x) dx = 3.7$, then the area bounded by the curve of $f(x)$ and the x -axis from $x = a$ to $x = c$ is:



- 0.3 0.7
 3.7 7.7

12. If $\int_a^3 -2x dx = 16$, then $a =$

- ± 1 $\pm\sqrt{17}$
 $\pm\sqrt{7}$ ± 5

13. If A and B are independent events, $P(A) = \frac{1}{4}$ and $P(B) = \frac{1}{3}$, then $P(A' \cap B) =$

- $\frac{1}{12}$ $\frac{1}{6}$
 $\frac{1}{4}$ $\frac{11}{12}$

14. If E_1, E_2 and E_3 are three mutually exclusive events, $P(E_1) = 2P(E_2) = 0.32$ and $P(E_1' \cap E_2' \cap E_3') = 0.21$, then $P(E_3) =$

- 0.15 0.31
 0.52 0.69

Extended Questions

Write your answer for each of the three questions in the constructed response section in the space provided.

Be sure to show all your work, including the correct units where applicable.

Question Two:

(14 marks)

A) i) If $\frac{6 - 9x}{(x + 4)(x^2 + 5)} = \frac{A(x^2 + 5) + Bx(x + 4) + c(x + 4)}{(x + 4)(x^2 + 5)}$, find A . (3 marks)

Do not write in this space

ii) Express $\frac{x^4 - 4x^2 + 1}{x(x - 2)(x + 2)}$ in partial fractions.

(3 marks)

Do not write in this space

Do not write in this space

Do not write in this space

- B)** Find the equation of the normal to $y = x^2$ at the point where $x = 1$. (3 marks)

Do not write in this space

- C) Without using calculator:
Find the value of $\cos 15^\circ - \tan 135^\circ$.

(5 marks)

Do not write in this space

Do not write in this space

Question Three:**[14 marks]**

A) i) Find, from the first principles, the derivative of $3x$. (2 marks)

ii) Show that there is only one point on the curve $y = \frac{8}{3}x^3 + 4x^2 + 2x$, where the tangent is parallel to $y = 4$. (3 marks)

Do not write in this space

- B) i)** Find the range of values of x , for which y is increasing, $y = -x^3 + 27x$. (3 mark)

Do not write in this space

Do not write in this space

Do not write in this space

- ii) The sum of two natural numbers equals 120, in which the multiplication of the square of one of them by the other number is to be **as maximum as possible**, Find the two numbers. (3 marks)

Do not write in this space

C) i) Find $\int \sqrt[5]{x^4} dx$.

(2 marks)

- ii) For all x if the second derivative of a curve equals 4, and it's gradient at (4,1) is 12, find the equation of the curve. (2 marks)

Do not write in this space

Do not write in this space

Question Four:**(14 marks)**

- A) i) Find the value of R and $\tan \alpha$ in the identity:
 $5\sin \theta + 3\cos \theta = R\cos (\theta - \alpha)$

(3 marks)

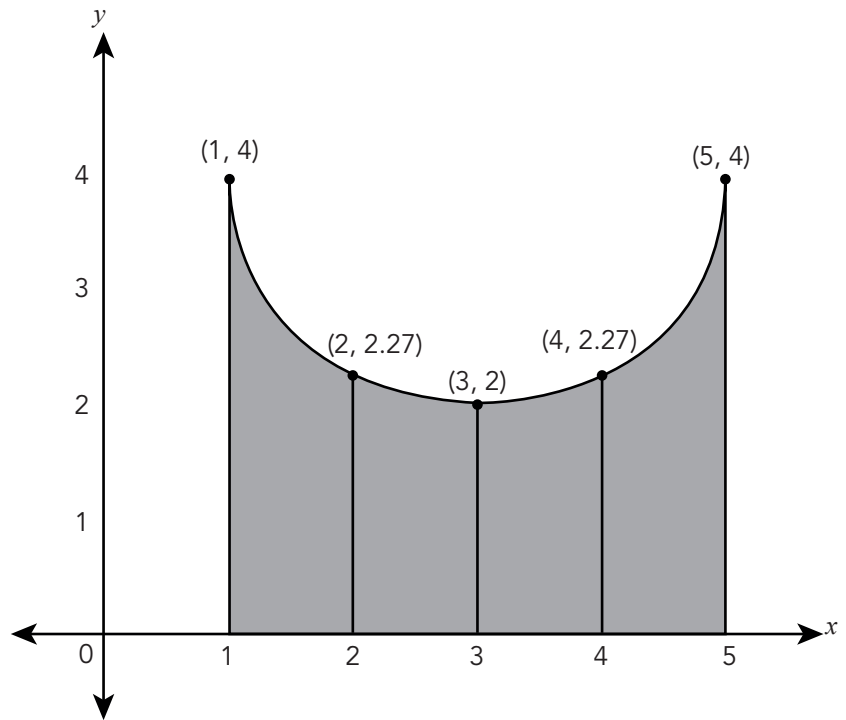
- ii) Prove the following identity:

(3 marks)

$$\left(\frac{4\sin^2(90^\circ - \theta)}{\operatorname{cosec}^2 \theta - \cot^2 \theta} + \frac{8\cos^2(90^\circ - \theta)}{2\sec^2 \theta - 2\tan^2 \theta} \right) \tan 2\theta = \frac{8\tan \theta}{2 - \sec^2 \theta}$$

Do not write in this space

- B) i)** Consider the sketch. Find an approximation to the shaded area by using the Trapezium Rule. (2 marks)

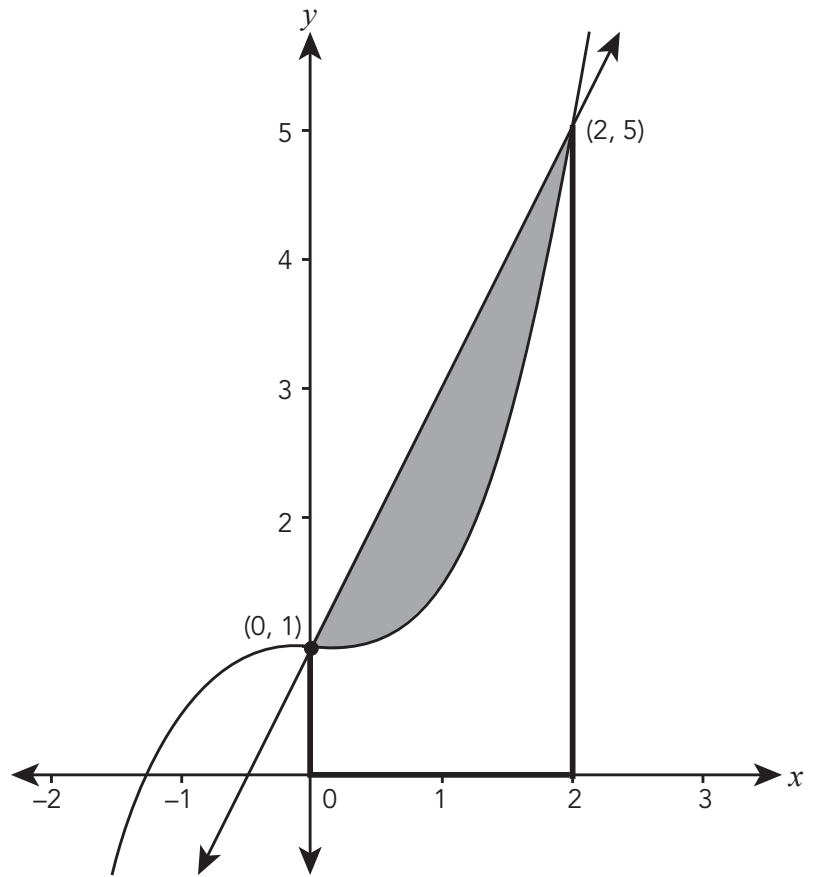


Do not write in this space

Do not write in this space

ii) Consider the sketch. Find the shaded area.

(2 marks)



Do not write in this space

- C) A and B are defined in sample space such that, $P(A) = 0.5$, $P(B) = 0.4$, $P(A \cup B) = 0.8$.
Find:

i) $P(A')$ (1 marks)

ii) $P(A|B)$ (3 marks)

END OF EXAMINATION AND GOOD LUCK!

Do not write in this space

Formulae Sheet For First Semester

Differentiation:

$$1. y = x^n \qquad \frac{dy}{dx} = nx^{(n-1)}$$

2. Area and volume of a cuboid with length, width and height as l , w , and h respectively.

$$Area = 2lw + 2wh + 2lh$$

$$Volume = l \times w \times h$$

3. Area and volume of a cylinder with radius, r , and height, h .

$$Area = 2\pi rh + 2\pi r^2$$

$$Volume = \pi r^2 h$$

4. Area and volume of a sphere with radius, r .

$$Area = 4\pi r^2$$

$$Volume = \frac{4}{3}\pi r^3$$

Trigonometry:

Pythagorean Formulas:

1. $\sin^2 A + \cos^2 A = 1$
2. $\sec^2 A = 1 + \tan^2 A$
3. $\operatorname{cosec}^2 A = 1 + \cot^2 A$
4. $\tan \theta = \cot(90 - \theta)$

Compound Angle Formulas:

1. $\sin(A + B) = \sin A \cos B + \cos A \sin B$
2. $\sin(A - B) = \sin A \cos B - \cos A \sin B$
3. $\cos(A + B) = \cos A \cos B - \sin A \sin B$
4. $\cos(A - B) = \cos A \cos B + \sin A \sin B$
5. $\tan(A + B) = \frac{\tan A + \tan B}{1 - \tan A \tan B}$
6. $\tan(A - B) = \frac{\tan A - \tan B}{1 + \tan A \tan B}$

Double Angle Formulas:

1. $\sin 2A = 2 \sin A \cos A$
2. $\cos 2A = \cos^2 A - \sin^2 A$
 $\cos 2A = 2 \cos^2 A - 1$
 $\cos 2A = 1 - 2 \sin^2 A$
3. $\tan 2A = \frac{2 \tan A}{1 - \tan^2 A}$

Half Angle Formulas:

1. $\sin^2 \frac{1}{2}A = \frac{1}{2}(1 - \cos A)$
2. $\cos^2 \frac{1}{2}A = \frac{1}{2}(1 + \cos A)$

The form $a \cos \theta + b \sin \theta$:

$a \cos \theta + b \sin \theta$ can be expressed in the form $R \cos(\theta \pm \alpha)$ or $R \sin(\theta \pm \alpha)$ where $R = \sqrt{a^2 + b^2}$,
 $\alpha = \arctan \frac{b}{a}$.

Integration:

$$1. \int x^n dx = \frac{x^{(n+1)}}{n+1} + c, \quad n \neq -1$$

2. Area and volume of solids of revolution

$$\text{Area} = \int_a^b f(x) dx \qquad \text{Volume} = \int_a^b \pi (f(x))^2 dx$$

3. Trapezium rule

$$\text{Area} = \frac{1}{2} h [y_0 + 2(y_1 + y_2 + \dots + y_{n-1}) + y_n]$$

Probability:

1. Addition Rule:

$$P(A \cup B) = P(A) + P(B) - P(A \cap B)$$

2. Conditional Probability:

$$P(A \text{ given } B) = P(A|B) = \frac{P(A \cap B)}{P(B)}$$

3. Multiplication Rule:

$$P(A \cap B) = P(A|B) \times P(B) \quad \text{or} \quad P(B|A) \times P(A)$$

4. Independent Rule:

A and B are independent if :

$$P(A|B) = P(A) \quad \text{or} \quad P(B|A) = P(B) \quad \text{or} \quad P(A \cap B) = P(A) \times P(B)$$

5. Mutually Exclusive Rule:

A and B are Mutually Exclusive if :


$$P(A \cap B) = 0$$

مُسَوِّدَة

مُسَوِّدَةٌ

Do not write in this space


SULTANATE OF OMAN
MINISTRY OF EDUCATION
GENERAL EDUCATION DIPLOMA
BILINGUAL PRIVATE SCHOOLS



Marking Guide Of First Semester Examination – Mathematics
Second Session – 2012/2013

(Multiple choice)															
Answer														Mark	
Answer For Question One:														14 × 2 = 28 marks	
Q	1	2	3	4	5	6	7	8	9	10	11	12	13		14
	a	a	d	c	b	a	d	c	c	b	d	d	c		b
Page	152	164	234	180	48	49 +52	50	70	167+ 169	169+ 173	328	328	96	95	
(Extended Questions)															
Answer												Mark	Page		
QUESTION TWO (14 marks)															
<p>A. i) (3marks)</p> $\frac{6-9x}{(x+4)(x^2+5)} = \frac{A(x^2+5)+Bx(x+4)+c(x+4)}{(x+4)(x^2+5)}$ <p>$A(x^2 + 5) + Bx(x + 4) + c(x + 4) = 6 - 9x$ let $x = -4$ $A(16 + 5) + 0 + 0 = 6 - 9(-4)$ $21A = 6 + 36$ $21A = 42$ $A = 2$</p>												1			
												1			
												1			

Marking Guide Of First Semester Examination – Mathematics
Second Session – 2012/2013



(Extended Questions)		
Answer	Mark	Page
QUESTION TWO (14 marks)		
B. (3 marks)		
When $x = 1$, $y = 1^2 = 1$ $y' = 2x$	$\frac{1}{2}$ $\frac{1}{2}$ $\frac{1}{2}$	
the gradient of tangent at $x = 1$, $y' = 2(1) = 2$	$\frac{1}{2}$ $\frac{1}{2}$	
the gradient of normal at $x = 1$ is $\frac{-1}{2}$	$\frac{1}{2}$	
the equation of the normal is $y - y_1 = m(x - x_1)$ $y - 1 = \frac{-1}{2}(x - 1) \rightarrow y = \frac{-1}{2}x + \frac{3}{2}$	1	
C. i) (5 marks)		
$\cos 15^\circ - \tan 135^\circ = \cos(60^\circ - 45^\circ) - \tan(180^\circ - 45^\circ)$	1	
$= \cos 60^\circ \cos 45^\circ + \sin 60^\circ \sin 45^\circ - \frac{\tan 180^\circ - \tan 45^\circ}{1 - \tan 180^\circ \times \tan 45^\circ}$	2	
$= \left(\frac{1}{2}\right)\left(\frac{1}{\sqrt{2}}\right) + \left(\frac{\sqrt{3}}{2}\right)\left(\frac{1}{\sqrt{2}}\right) - \left(\frac{0-1}{1-(0)(1)}\right)$	1	
$= \frac{1}{2\sqrt{2}} + \frac{\sqrt{3}}{2\sqrt{2}} + 1$	$\frac{1}{2}$ $\frac{1}{2}$	
$= \frac{1+\sqrt{3}}{2\sqrt{2}} + 1 = \frac{1+\sqrt{3}}{2\sqrt{2}} + \frac{2\sqrt{2}}{2\sqrt{2}} = \frac{1+\sqrt{2}+\sqrt{3}}{2\sqrt{2}}$	$\frac{1}{2}$ $\frac{1}{2}$	
<u>Another solution</u>		
$\cos 15^\circ - \tan 135^\circ = \cos(45^\circ - 30^\circ) - \tan(90^\circ + 45^\circ)$	1	
$= \cos 45^\circ \cos 30^\circ + \sin 45^\circ \sin 30^\circ - \frac{\sin(90^\circ+45^\circ)}{\cos(90^\circ+45^\circ)}$	2	
$= \cos 45^\circ \cos 30^\circ + \sin 45^\circ \sin 30^\circ - \frac{-\sin 45^\circ}{\cos 45^\circ}$	$\frac{1}{2}$ $\frac{1}{2}$	
$= \left(\frac{1}{\sqrt{2}}\right)\left(\frac{\sqrt{3}}{2}\right) + \left(\frac{1}{\sqrt{2}}\right)\left(\frac{1}{2}\right) - (-1)$	1	
$= \frac{\sqrt{3}}{2\sqrt{2}} + \frac{1}{2\sqrt{2}} + 1 = \frac{1+\sqrt{2}+\sqrt{3}}{2\sqrt{2}}$	$\frac{1}{2}$ $\frac{1}{2}$	

Marking Guide Of First Semester Examination – Mathematics
Second Session – 2012/2013




(Extended Questions)		
Answer	Mark	Page
QUESTION THREE (14 marks)		
<p>A. i) (2 marks)</p> $\frac{dy}{dx} = \lim_{h \rightarrow 0} \frac{f(x+h) - f(x)}{h}$ $= \lim_{h \rightarrow 0} \frac{3(x+h) - 3x}{h}$ $= \lim_{h \rightarrow 0} \frac{3x + 3h - 3x}{h}$ $= \lim_{h \rightarrow 0} \frac{3h}{h} = 3$	$\frac{1}{2}$ $\frac{1}{2}$ $\frac{1}{2} + \frac{1}{2}$	
<p>A. ii) (3 marks)</p> $y' = \frac{8}{3}(3x^2) + 4(2x) + 2$ $y' = \frac{8}{3}(3x^2) + 4(2x) + 2 = 0$ $8x^2 + 8x + 2 = 0$ $2(4x^2 + 4x + 1) = 0$ <p>the gradient is zero $\rightarrow (2x + 1)^2 = 0$</p> $x = \frac{-1}{2}$	 $\frac{1}{2}$ $\frac{1}{2}$ 1	
<p>B. i) (3 marks)</p> $y' = -3x^2 + 27$ $y' > 0$ $27 - 3x^2 > 0 \quad \text{y is increasing function if}$ $3(9 - x^2) > 0$ $(3 - x)(3 + x) > 0$ $x = 3 \quad , \quad x = -3$ <p>y is increasing function of x for $-3 < x < 3$</p>	 $\frac{1}{2}$ $\frac{1}{2}$ 1	

Marking Guide Of First Semester Examination – Mathematics
Second Session – 2012/2013




(Extended Questions)		
Answer	Mark	Page
<p>B. ii) (3 marks) Let the first number be x Let the second number be y $x + y = 120$ $y = (120 - x)$ $f(x) = x^2 y$ $f(x) = x^2(120 - x)$ $f(x) = 120 x^2 - x^3$ $f'(x) = 240x - 3x^2$ $240 x - 3x^2 = 0 \rightarrow 3x(80 - x) = 0$ $x = 0$ (rejected) , $x = 80$ $f''(x) = 240 - 6x$ $f''(80) = 240 - 6(80) = -240 < 0$ then $y = 120 - 80 = 40$ The numbers are: 80,40</p>	<p>$\frac{1}{2}$</p> <p>$\frac{1}{2}$</p> <p>$\frac{1}{2}$</p> <p>$\frac{1}{2}$</p> <p>$\frac{1}{2}$</p> <p>$\frac{1}{2}$</p>	
<p>C. i) (2 marks) $= \int x^{\frac{4}{5}} dx$ $\frac{x^{\frac{4}{5}+1}}{\frac{4}{5}+1} + c = \frac{x^{\frac{9}{5}}}{\frac{9}{5}} + c$ $\frac{5 x^{\frac{9}{5}}}{9} + c$</p>	<p>$1 + \frac{1}{2}$</p> <p>$\frac{1}{2}$</p>	

Marking Guide Of First Semester Examination – Mathematics
Second Session – 2012/2013



(Extended Questions)		
Answer	Mark	Page
<p>C. ii) (2 marks)</p> $f''(x) = 4$ $f'(x) = \int 4 dx = 4x + c$ $f'(4) = 4(4) + c = 12$ $c = -4$ $f'(x) = 4x - 4$ $f(x) = \int (4x - 4) dx$ $f(x) = 2x^2 - 4x + c$ $f(4) = 2(4)^2 - 4(4) + c = 1$ $c = -15$ $f(x) = 2x^2 - 4x - 15$	<p>$\frac{1}{2}$</p> <p>$\frac{1}{2}$</p> <p>$\frac{1}{2}$</p> <p>$\frac{1}{2}$</p> <p>$\frac{1}{2}$</p>	
<u>QUESTION FOUR (14 marks)</u>		
<p>A. ii) (3 marks)</p> $5 \sin \theta + 3 \cos \theta = R \cos(\theta - \alpha)$ $a = 3, b = 5$ $R = \sqrt{a^2 + b^2} = \sqrt{9 + 25} = \sqrt{34}$ $\tan \alpha = \frac{b}{a} = \frac{5}{3}$	<p>$\frac{1}{2} + \frac{1}{2}$</p> <p>$\frac{1}{2} + \frac{1}{2}$</p> <p>1</p>	
<p>A. ii) (3 marks)</p> $\left[\frac{4 \cos^2 \theta}{1} + \frac{8 \sin^2 \theta}{2(1)} \right] \times \frac{2 \tan \theta}{1 - \tan^2 \theta}$ $= 4 (\sin^2 \theta + \cos^2 \theta) \times \frac{2 \tan \theta}{1 - (-1 + \sec^2 \theta)}$ $= 4 (1) \times \frac{2 \tan \theta}{1 + 1 - \sec^2 \theta}$ $= \frac{8 \tan \theta}{2 - \sec^2 \theta}$	<p>$\frac{1}{2} + \frac{1}{2} + \frac{1}{2}$</p> <p>$\frac{1}{2}$</p> <p>$\frac{1}{2}$</p> <p>$\frac{1}{2}$</p>	

Marking Guide Of First Semester Examination – Mathematics
Second Session – 2012/2013



(Extended Questions)		
Answer	Mark	Page
<p>B. i) (2 marks)</p> <p>Area $\cong \frac{h}{2} [y_0 + y_n + 2(y_1 + y_2 + \dots + y_{n-1})]$</p> <p>$\cong \frac{1}{2} [4 + 4 + 2(2.27 + 2 + 2.27)]$</p> <p>$\cong \frac{1}{2} (21.08) = 10.54$ square unit</p>	<p>1</p> <p>1</p>	
<p>B. ii) (2 marks)</p> <p>The area of trapezium $= \frac{1}{2} (5 + 1) \times 2 = 6$ square unit</p> <p>The area under the curve $f(x)$ is: $\int_0^2 (\frac{1}{2} x^3 + 1) dx = [\frac{1}{2} (\frac{x^4}{4}) + x]_0^2$</p> <p>$= [\frac{x^4}{8} + x]_0^2 = (\frac{16}{8} + 2) - 0 = 4$ square unit</p> <p>The shaded area = The area of trapezium - The area under the curve $f(x)$</p> <p>$= 6 - 4 = 2$ square unit</p>	<p>$\frac{1}{2}$</p> <p>1</p> <p>$\frac{1}{2}$</p>	
<p>C. i) (1 marks)</p> <p>$P(A') = 1 - P(A)$</p> <p>$= 1 - 0.5$</p>	<p>1</p>	
<p>C. ii) (3 marks)</p> <p>$P(A \cup B) = P(A) + P(B) - P(A \cap B)$</p> <p>$P(A \cap B) = P(A) + P(B) - P(A \cup B)$</p> <p>$P(A \cap B) = 0.5 + 0.4 - 0.8 = 0.1$</p> <p>$P(A B) = \frac{P(A \cap B)}{P(B)}$</p> <p>$\frac{0.1}{0.4}$</p> <p>$= \frac{1}{4} = 0.25$</p>	<p>$\frac{1}{2}$</p> <p>1</p> <p>1</p> <p>$\frac{1}{2}$</p>	

((End of the Marking Guide))